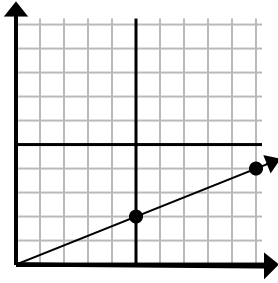




Determine which choice represents a point on the line if it were to continue.

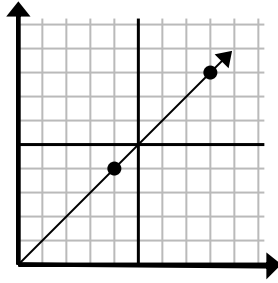
Answers

1)



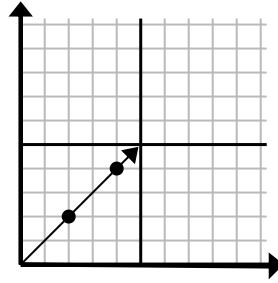
- A. (15, 6)
- B. (25, 10)
- C. (20, 8)
- D. (30, 12)

2)



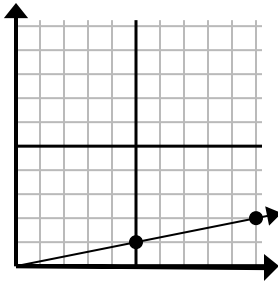
- A. (20, 20)
- B. (11, 6)
- C. (12, 8)
- D. (12, 12)

3)



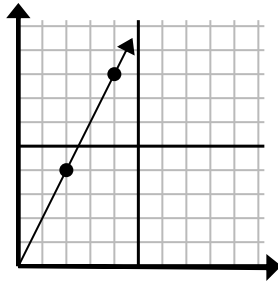
- A. (8, 6)
- B. (10, 10)
- C. (6, 6)
- D. (14, 14)

4)



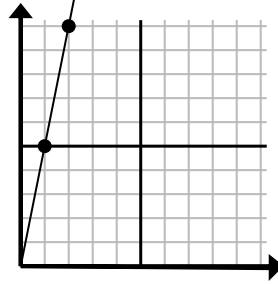
- A. (30, 6)
- B. (14, 5)
- C. (15, 3)
- D. (14, 3)

5)



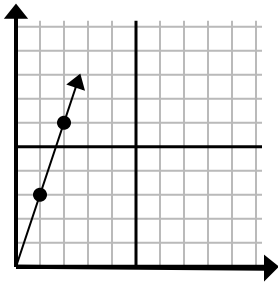
- A. (12, 24)
- B. (6, 12)
- C. (9, 6)
- D. (7, 7)

6)



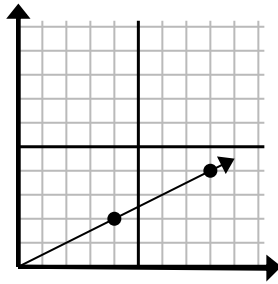
- A. (5, 25)
- B. (6, 7)
- C. (3, 15)
- D. (4, 8)

7)



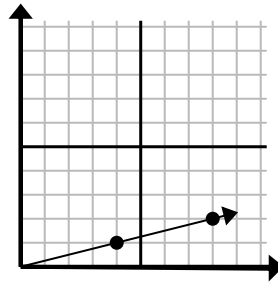
- A. (6, 5)
- B. (6, 18)
- C. (3, 9)
- D. (7, 21)

8)



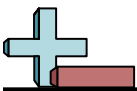
- A. (20, 10)
- B. (28, 14)
- C. (13, 7)
- D. (12, 6)

9)



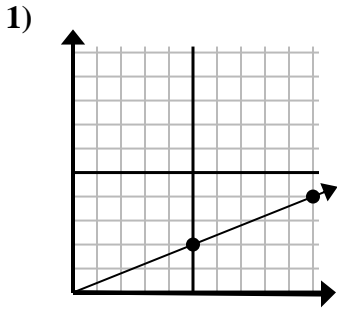
- A. (16, 4)
- B. (24, 6)
- C. (28, 7)
- D. (12, 3)

1. \_\_\_\_\_
2. \_\_\_\_\_
3. \_\_\_\_\_
4. \_\_\_\_\_
5. \_\_\_\_\_
6. \_\_\_\_\_
7. \_\_\_\_\_
8. \_\_\_\_\_
9. \_\_\_\_\_

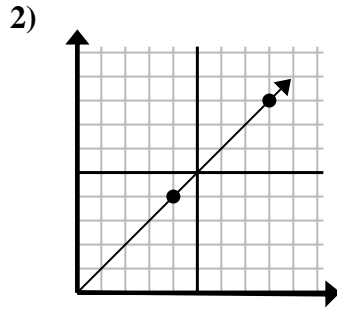


Determine which choice represents a point on the line if it were to continue.

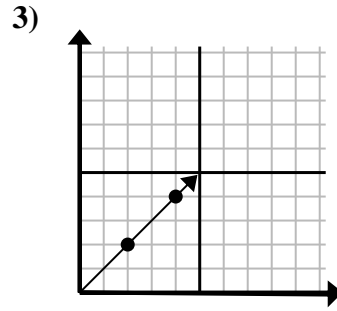
Answers



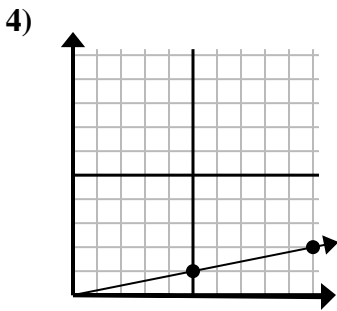
- A. (15 , 6)
- B. (25 , 10)
- C. (20 , 8)
- D. (30 , 12)



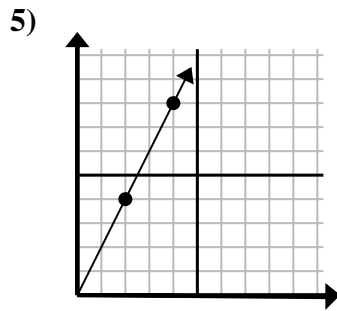
- A. (20 , 20)
- B. (11 , 6)
- C. (12 , 8)
- D. (12 , 12)



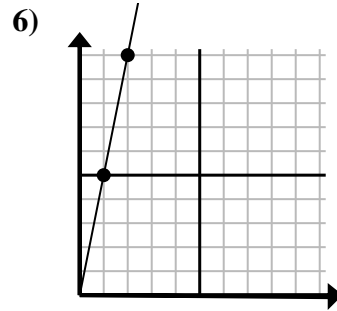
- A. (8 , 6)
- B. (10 , 10)
- C. (6 , 6)
- D. (14 , 14)



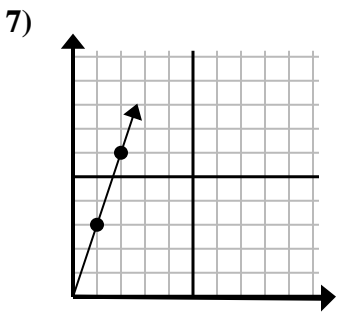
- A. (30 , 6)
- B. (14 , 5)
- C. (15 , 3)
- D. (14 , 3)



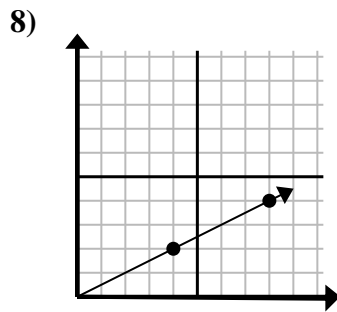
- A. (12 , 24)
- B. (6 , 12)
- C. (9 , 6)
- D. (7 , 7)



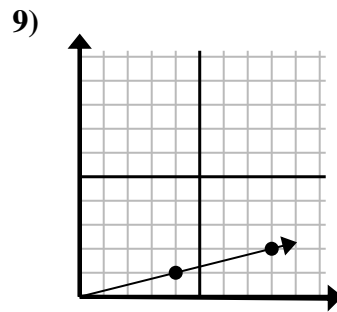
- A. (5 , 25)
- B. (6 , 7)
- C. (3 , 15)
- D. (4 , 8)



- A. (6 , 5)
- B. (6 , 18)
- C. (3 , 9)
- D. (7 , 21)



- A. (20 , 10)
- B. (28 , 14)
- C. (13 , 7)
- D. (12 , 6)



- A. (16 , 4)
- B. (24 , 6)
- C. (28 , 7)
- D. (12 , 3)

- 1.     **A**
- 2.     **D**
- 3.     **C**
- 4.     **C**
- 5.     **B**
- 6.     **C**
- 7.     **C**
- 8.     **D**
- 9.     **D**